

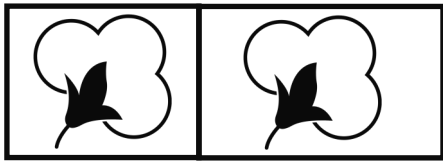
My Family's Cotton Farm: Addition and Subtraction Worksheet

2nd Grade

Name: _____

Directions: Use the *My Family's Cotton Farm* book to help answer the questions.


1. A farmer is buying more acres for his cotton. The farmer currently has 25 acres. The farmer wants to buy 45 more acres. How many acres in total will the farmer have?



25 acres

45 acres

2. A farmer has three fields. The first field has sheep and is 15 acres. The second field has watermelon and is 44 acres. The third field has cotton and is 39 acres. How many acres in total does the farmer have?

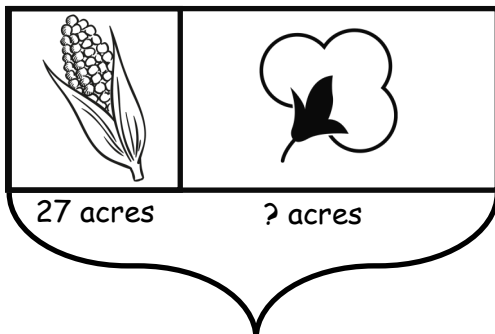


15 acres

44 acres

39 acres

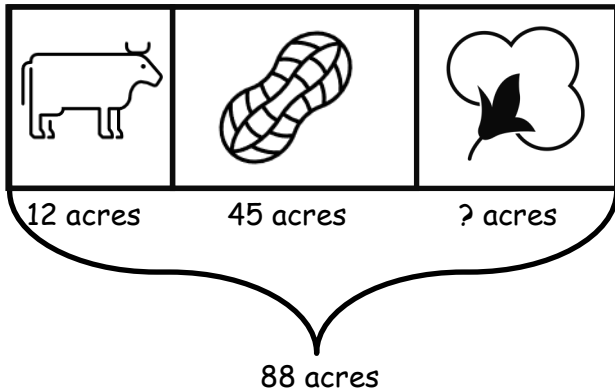
3. A farmer has 75 acres of land. He used 27 acres for corn. How many acres does the farmer have left for cotton?



75 acres

Flip Page Over

4. A farmer has 88 acres of land. Cows are on 12 of the acres. Peanuts are in 45 of the acres. How many acres are left for cotton?



BONUS! A farmer has 64 acres of land with cotton. He sold 12 acres to his farmer friend. Later on he bought 31 acres of land from the city for his goats. How many acres does the farmer now have?

