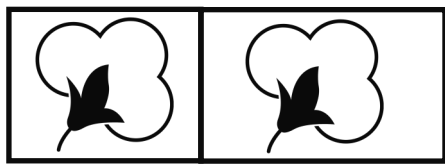


Name: \_\_\_\_\_

Directions: Use the *My Family's Cotton Farm* book to help answer the questions.


1. A farmer is buying more acres for his cotton. The farmer currently has 3 acres. The farmer wants to buy 5 more acres. How many acres in total will the farmer have?



3 acres

5 acres

2. A farmer has three fields. The first field has sheep and is 3 acres. The second field has watermelon and is 4 acres. The third field has cotton and it is 3 acres. How many acres in total does the farmer have?



3 acres

4 acres

3 acres

3. A farmer has 9 acres of land. He used 3 acres for corn. How many acres does the farmer have left for cotton?



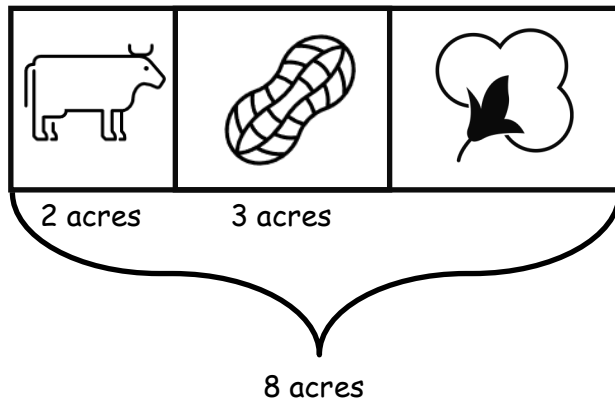
3 acres

? acres

9 acres

**Flip Page Over**

4. A farmer has 8 acres of land. Cows are on 2 of the acres. Peanuts are in 3 of the acres. How many acres are left for cotton?



BONUS! A farmer has 7 acres of land with cotton. He sold 2 acres to his farmer friend. Later on he bought 5 acres of land from the city for his goats. How many acres does the farmer now have?

